

Name : \_\_\_\_\_

Score : \_\_\_\_\_

Teacher : \_\_\_\_\_

Date : \_\_\_\_\_

---

### Adding Simple Fractions

1)  $\frac{2}{8} + \frac{2}{8} =$

2)  $\frac{4}{12} + \frac{4}{12} =$

3)  $\frac{3}{12} + \frac{7}{12} =$

4)  $\frac{2}{11} + \frac{8}{11} =$

5)  $\frac{2}{9} + \frac{5}{9} =$

6)  $\frac{5}{12} + \frac{6}{12} =$

7)  $\frac{2}{11} + \frac{7}{11} =$

8)  $\frac{2}{10} + \frac{7}{10} =$

9)  $\frac{1}{3} + \frac{1}{3} =$

10)  $\frac{3}{10} + \frac{6}{10} =$



Name : \_\_\_\_\_

Score : \_\_\_\_\_

Teacher : \_\_\_\_\_

Date : \_\_\_\_\_

---

### Adding Simple Fractions

$$1) \quad \frac{2}{8} + \frac{2}{8} = \frac{4}{8}$$

$$2) \quad \frac{4}{12} + \frac{4}{12} = \frac{8}{12}$$

$$3) \quad \frac{3}{12} + \frac{7}{12} = \frac{10}{12}$$

$$4) \quad \frac{2}{11} + \frac{8}{11} = \frac{10}{11}$$

$$5) \quad \frac{2}{9} + \frac{5}{9} = \frac{7}{9}$$

$$6) \quad \frac{5}{12} + \frac{6}{12} = \frac{11}{12}$$

$$7) \quad \frac{2}{11} + \frac{7}{11} = \frac{9}{11}$$

$$8) \quad \frac{2}{10} + \frac{7}{10} = \frac{9}{10}$$

$$9) \quad \frac{1}{3} + \frac{1}{3} = \frac{2}{3}$$

$$10) \quad \frac{3}{10} + \frac{6}{10} = \frac{9}{10}$$



Name : \_\_\_\_\_

Score : \_\_\_\_\_

Teacher : \_\_\_\_\_

Date : \_\_\_\_\_

---

$55 \div 5 =$

$48 \div 12 =$

$12 \div 6 =$

$16 \div 8 =$

$56 \div 7 =$

$36 \div 4 =$

$36 \div 9 =$

$12 \div 12 =$

$9 \div 1 =$

$48 \div 12 =$

$15 \div 5 =$

$11 \div 1 =$

$4 \div 4 =$

$12 \div 1 =$

$10 \div 2 =$

$9 \div 3 =$

$64 \div 8 =$

$70 \div 7 =$

$25 \div 5 =$

$30 \div 3 =$

$120 \div 10 =$

$70 \div 7 =$

$63 \div 9 =$

$63 \div 9 =$

$4 \div 2 =$

$36 \div 4 =$

$66 \div 6 =$

$120 \div 10 =$

$11 \div 11 =$

$66 \div 11 =$



Name : \_\_\_\_\_

Score : \_\_\_\_\_

Teacher : \_\_\_\_\_

Date : \_\_\_\_\_

---

$55 \div 5 = 11$

$48 \div 12 = 4$

$12 \div 6 = 2$

$16 \div 8 = 2$

$56 \div 7 = 8$

$36 \div 4 = 9$

$36 \div 9 = 4$

$12 \div 12 = 1$

$9 \div 1 = 9$

$48 \div 12 = 4$

$15 \div 5 = 3$

$11 \div 1 = 11$

$4 \div 4 = 1$

$12 \div 1 = 12$

$10 \div 2 = 5$

$9 \div 3 = 3$

$64 \div 8 = 8$

$70 \div 7 = 10$

$25 \div 5 = 5$

$30 \div 3 = 10$

$120 \div 10 = 12$

$70 \div 7 = 10$

$63 \div 9 = 7$

$63 \div 9 = 7$

$4 \div 2 = 2$

$36 \div 4 = 9$

$66 \div 6 = 11$

$120 \div 10 = 12$


$11 \div 11 = 1$

$66 \div 11 = 6$

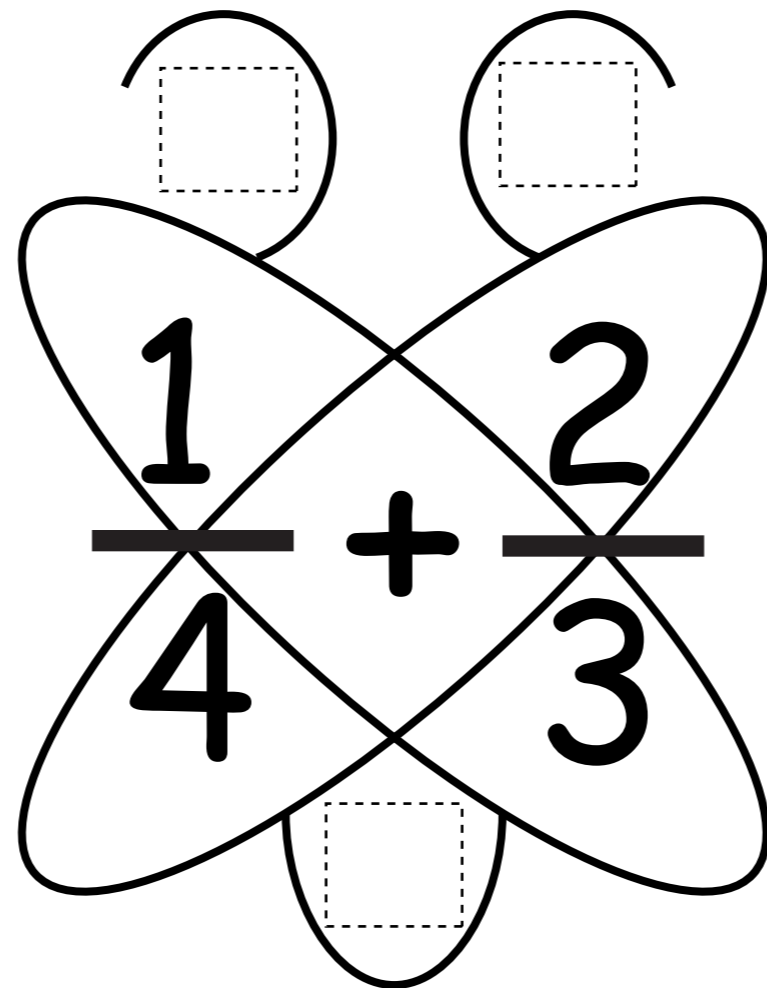


# Fraction Addition


$$\frac{1}{2} + \frac{3}{5}$$



$$\frac{1}{4} + \frac{2}{3}$$




$$\frac{2}{5} + \frac{1}{4}$$

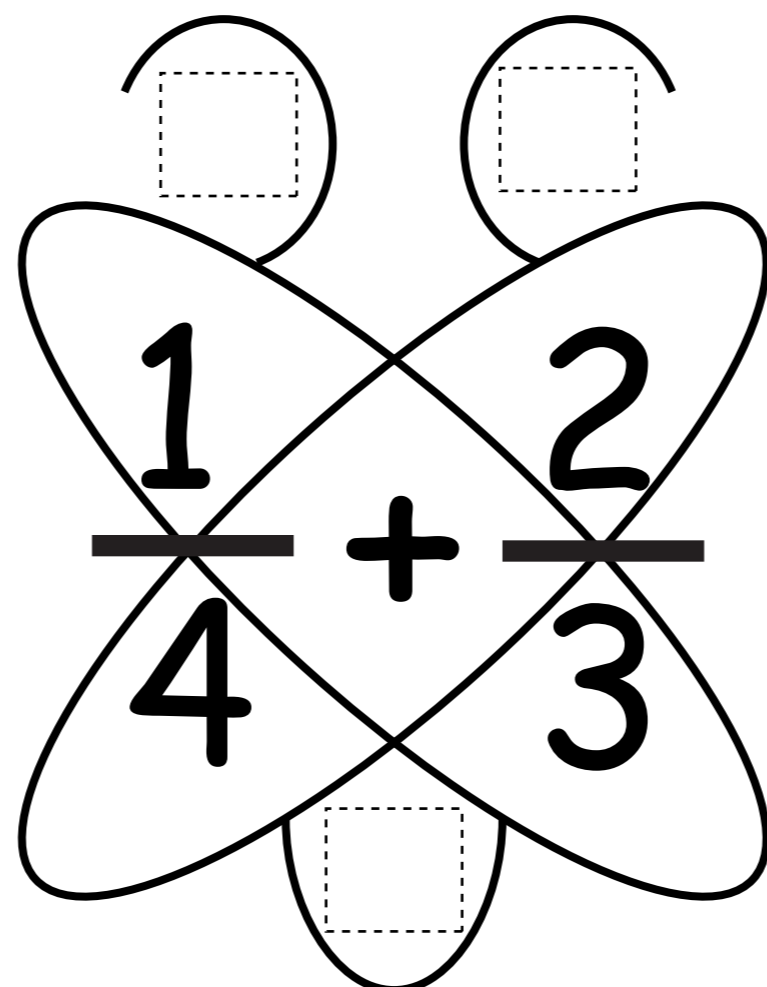


# Fraction Addition

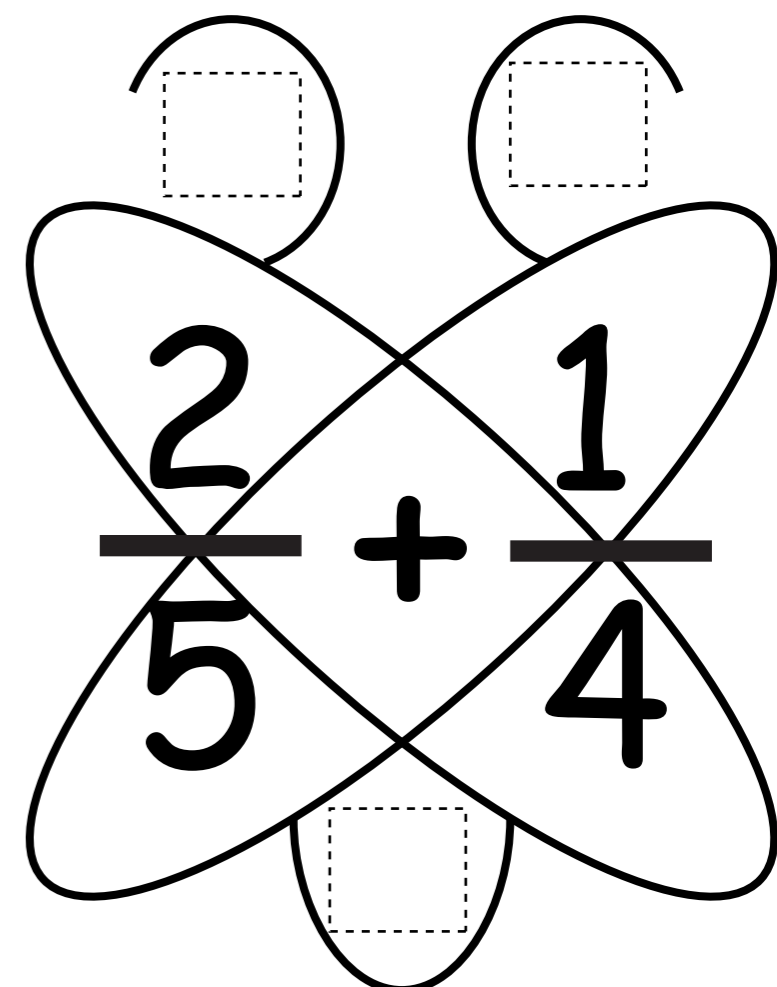
$$\frac{1}{2} + \frac{3}{5}$$



$$\frac{1}{4} + \frac{2}{3}$$



$$\frac{2}{5} + \frac{1}{4}$$



Name : \_\_\_\_\_

Score : \_\_\_\_\_

Teacher : \_\_\_\_\_

Date : \_\_\_\_\_

---

### Adding Fractions

1)  $\frac{1}{2} + \frac{4}{5} =$

2)  $\frac{2}{10} + \frac{2}{4} =$

3)  $\frac{1}{2} + \frac{3}{5} =$

4)  $\frac{1}{2} + \frac{4}{10} =$

5)  $\frac{2}{4} + \frac{2}{3} =$

6)  $\frac{3}{10} + \frac{1}{2} =$

7)  $\frac{2}{3} + \frac{6}{10} =$

8)  $\frac{4}{10} + \frac{1}{3} =$

9)  $\frac{1}{3} + \frac{3}{5} =$

10)  $\frac{3}{4} + \frac{2}{5} =$



Name : \_\_\_\_\_

Score : \_\_\_\_\_

Teacher : \_\_\_\_\_

Date : \_\_\_\_\_

### Adding Fractions

$$1) \quad \frac{1}{2} + \frac{4}{5} = \quad \frac{5}{10} + \frac{8}{10} = \quad \frac{13}{10} = \quad 1\frac{3}{10}$$

$$2) \quad \frac{2}{10} + \frac{2}{4} = \quad \frac{4}{20} + \frac{10}{20} = \quad \frac{14}{20} = \quad \frac{7}{10}$$

$$3) \quad \frac{1}{2} + \frac{3}{5} = \quad \frac{5}{10} + \frac{6}{10} = \quad \frac{11}{10} = \quad 1\frac{1}{10}$$

$$4) \quad \frac{1}{2} + \frac{4}{10} = \quad \frac{5}{10} + \frac{4}{10} = \quad \frac{9}{10}$$

$$5) \quad \frac{2}{4} + \frac{2}{3} = \quad \frac{6}{12} + \frac{8}{12} = \quad \frac{14}{12} = \quad \frac{7}{6} = \quad 1\frac{1}{6}$$

$$6) \quad \frac{3}{10} + \frac{1}{2} = \quad \frac{3}{10} + \frac{5}{10} = \quad \frac{8}{10} = \quad \frac{4}{5}$$

$$7) \quad \frac{2}{3} + \frac{6}{10} = \quad \frac{20}{30} + \frac{18}{30} = \quad \frac{38}{30} = \quad \frac{19}{15} = \quad 1\frac{4}{15}$$

$$8) \quad \frac{4}{10} + \frac{1}{3} = \quad \frac{12}{30} + \frac{10}{30} = \quad \frac{22}{30} = \quad \frac{11}{15}$$

$$9) \quad \frac{1}{3} + \frac{3}{5} = \quad \frac{5}{15} + \frac{9}{15} = \quad \frac{14}{15}$$

$$10) \quad \frac{3}{4} + \frac{2}{5} = \quad \frac{15}{20} + \frac{8}{20} = \quad \frac{23}{20} = \quad 1\frac{3}{20}$$





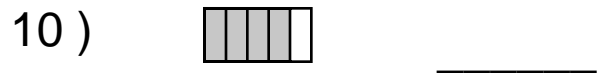
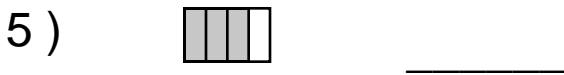
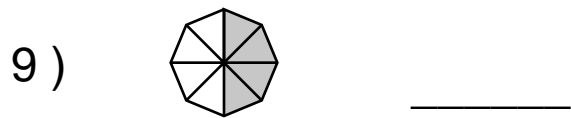
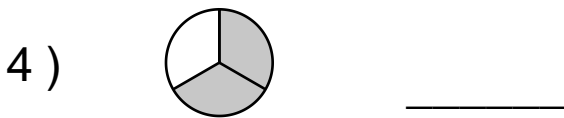
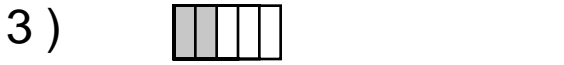
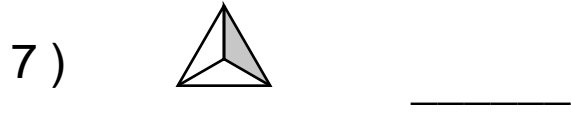
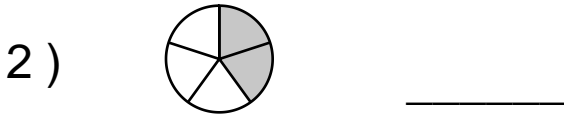
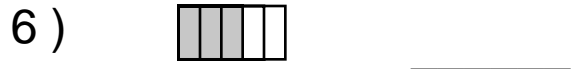
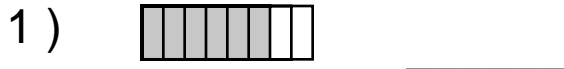
Name : \_\_\_\_\_

Score : \_\_\_\_\_

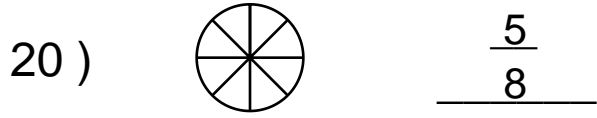
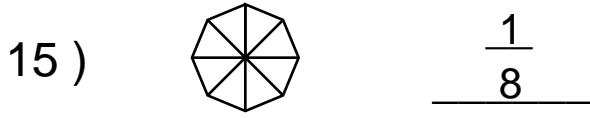
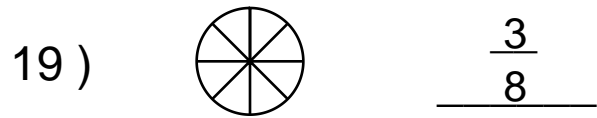
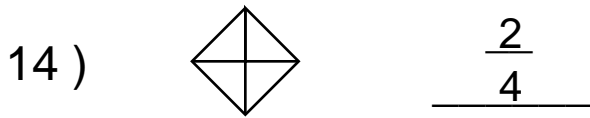
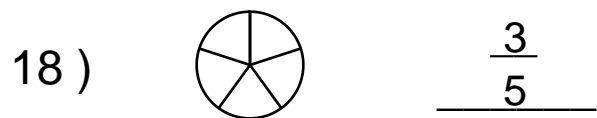
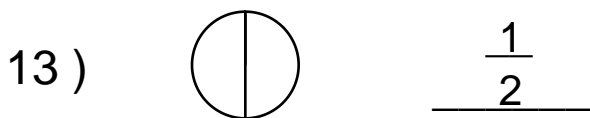
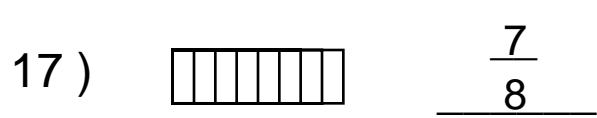
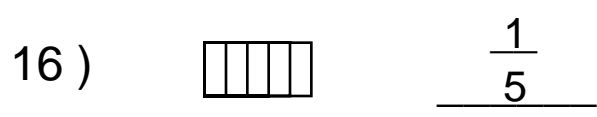
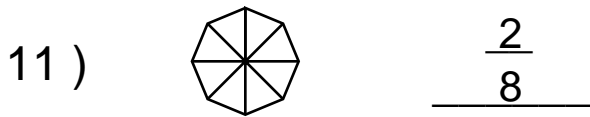
Teacher : \_\_\_\_\_

Date : \_\_\_\_\_

What is the Fraction of the Shaded Area ?



Shade the Figure with the Indicated Fraction.



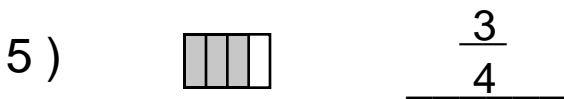
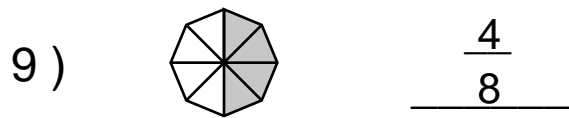
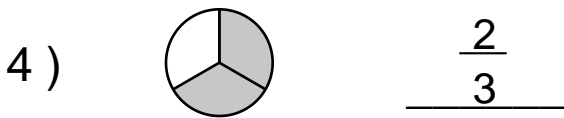
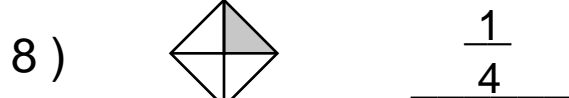
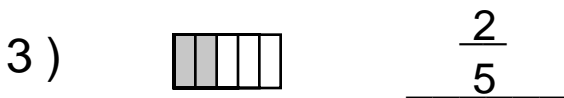
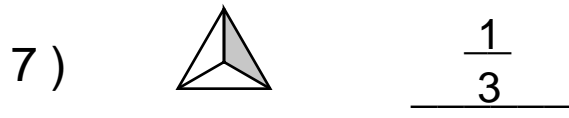
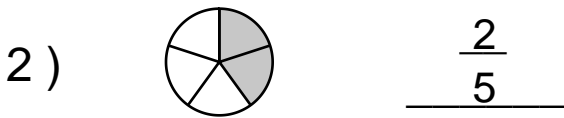
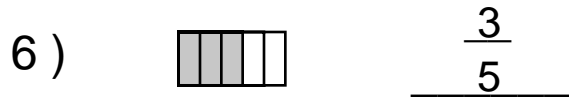
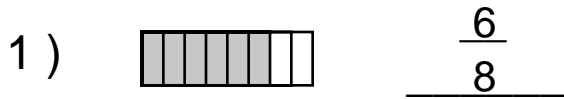
Name : \_\_\_\_\_

Score : \_\_\_\_\_

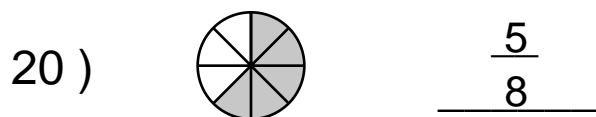
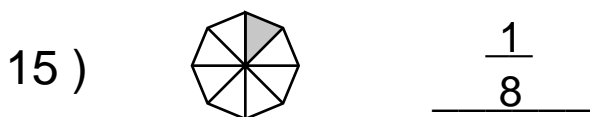
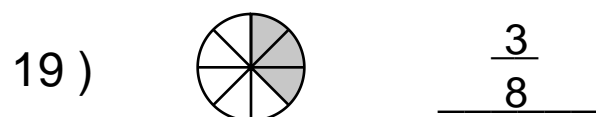
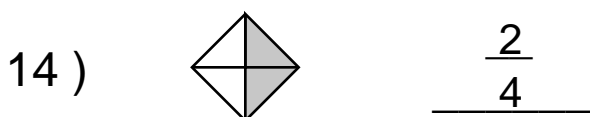
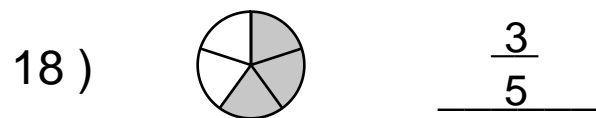
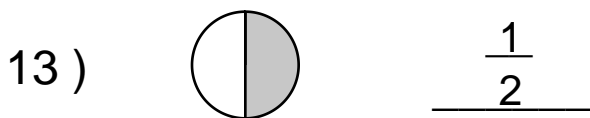
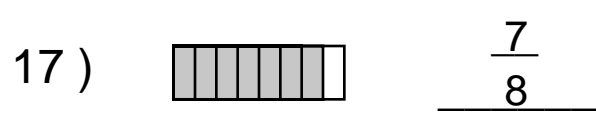
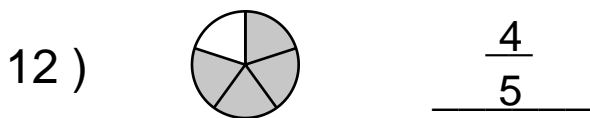
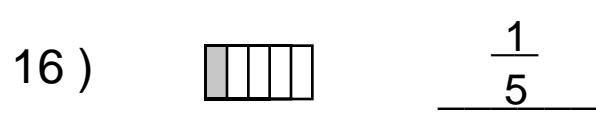
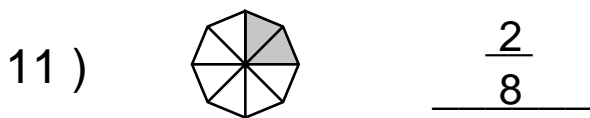
Teacher : \_\_\_\_\_

Date : \_\_\_\_\_

What is the Fraction of the Shaded Area ?



Shade the Figure with the Indicated Fraction.



Name : \_\_\_\_\_

Score : \_\_\_\_\_

Teacher : \_\_\_\_\_

Date : \_\_\_\_\_

---

$$4 \overline{)20}$$

$$6 \overline{)48}$$

$$7 \overline{)35}$$

$$4 \overline{)16}$$

$$6 \overline{)18}$$

$$4 \overline{)16}$$

$$8 \overline{)8}$$

$$6 \overline{)36}$$

$$2 \overline{)2}$$



Name : \_\_\_\_\_

Score : \_\_\_\_\_

Teacher : \_\_\_\_\_

Date : \_\_\_\_\_

---

$$4 \overline{)20} \begin{array}{r} 5 \\ \hline \end{array}$$

$$6 \overline{)48} \begin{array}{r} 8 \\ \hline \end{array}$$

$$7 \overline{)35} \begin{array}{r} 5 \\ \hline \end{array}$$

$$4 \overline{)16} \begin{array}{r} 4 \\ \hline \end{array}$$

$$6 \overline{)18} \begin{array}{r} 3 \\ \hline \end{array}$$

$$4 \overline{)16} \begin{array}{r} 4 \\ \hline \end{array}$$

$$8 \overline{)8} \begin{array}{r} 1 \\ \hline \end{array}$$

$$6 \overline{)36} \begin{array}{r} 6 \\ \hline \end{array}$$

$$2 \overline{)2} \begin{array}{r} 1 \\ \hline \end{array}$$

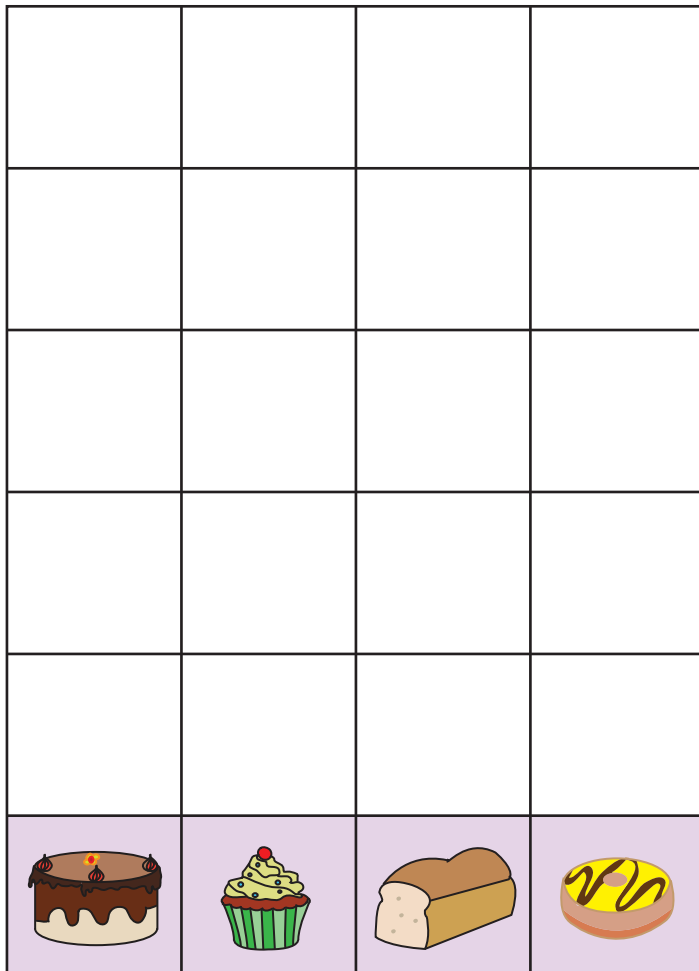



Name : \_\_\_\_\_

Score : \_\_\_\_\_

## Picture Graph - Bakery Items

Cut out each bakery item and paste it on the graph above the same kind.  
Based on the graph, answer the questions.



1) Which has the most?



2) How many more  than ?

\_\_\_\_\_

3) How many  are there?


\_\_\_\_\_

Name : \_\_\_\_\_

Score : \_\_\_\_\_

## Picture Graph - Bakery Items

Cut out each bakery item and paste it on the graph above the same kind.  
Based on the graph, answer the questions.



1) Which has the most?



2) How many more than ?

2

3) How many are there?

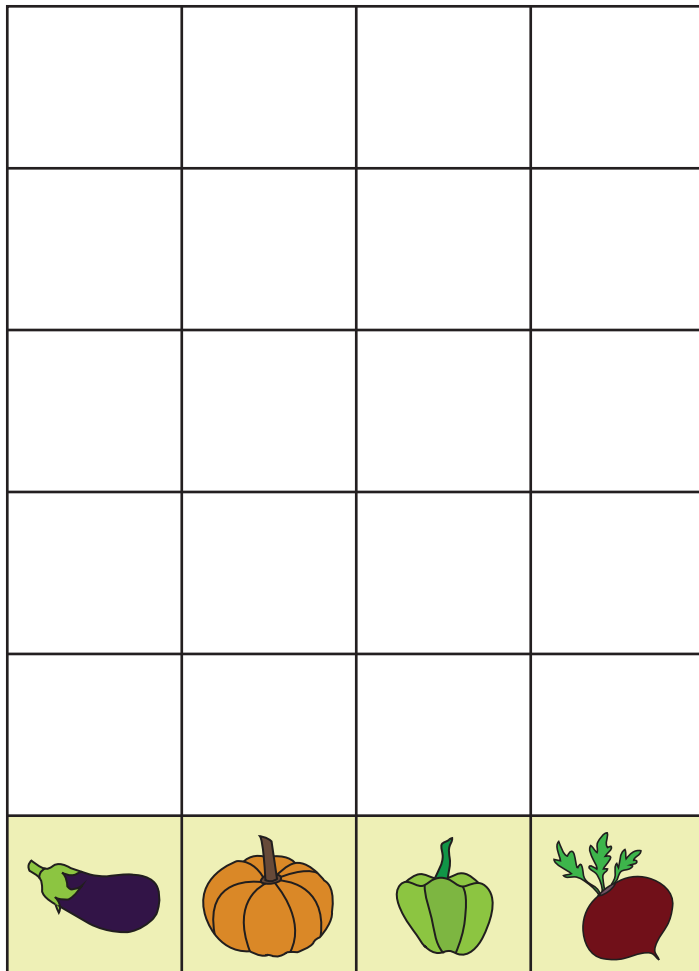

3

Name : \_\_\_\_\_

Score : \_\_\_\_\_

## Picture Graph - Vegetables

Cut out each vegetable and paste it on the graph above the same kind.  
Based on the graph, answer the questions.



1) Which vegetable counts more than 4?



2) Which has the fewest?






















3) How many , ,  and  in all?

\_\_\_\_\_


# Picture Graph - Vegetables

Cut out each vegetable and paste it on the graph above the same kind.  
Based on the graph, answer the questions.



1) Which vegetable counts more than 4?



2) Which has the fewest?



3) How many  ,  ,  and  in all?

    14

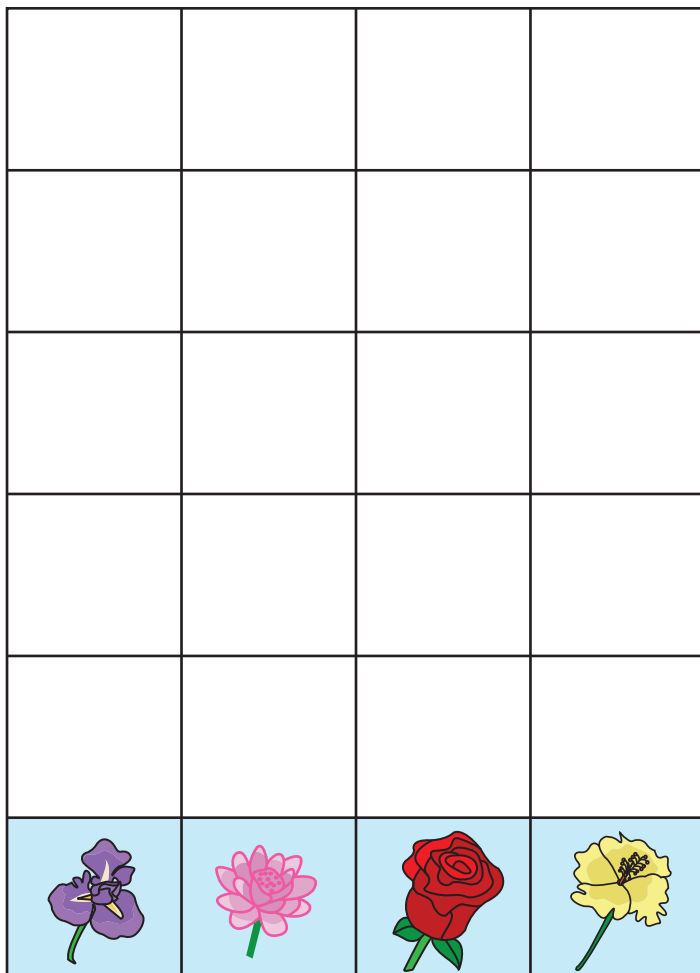



Name : \_\_\_\_\_

Score : \_\_\_\_\_

## Picture Graph - Garden Flowers

Cut out each flower and paste it on the graph above the same kind.  
Based on the graph, answer the questions.



1) Which has fewer?



2) Which flower counts to 3?





















3) How many fewer  than  ?

\_\_\_\_\_


Name : \_\_\_\_\_

Score : \_\_\_\_\_


# Answer Key

1) Which has fewer?



2) Which flower counts to 3?



3) How many fewer  than .

1

Name : \_\_\_\_\_

Score : \_\_\_\_\_

Teacher : \_\_\_\_\_

Date : \_\_\_\_\_

---

$$\begin{array}{r} 40 \\ \times 38 \\ \hline \end{array}$$

$$\begin{array}{r} 72 \\ \times 69 \\ \hline \end{array}$$

$$\begin{array}{r} 92 \\ \times 37 \\ \hline \end{array}$$

$$\begin{array}{r} 52 \\ \times 13 \\ \hline \end{array}$$

$$\begin{array}{r} 45 \\ \times 70 \\ \hline \end{array}$$

$$\begin{array}{r} 74 \\ \times 34 \\ \hline \end{array}$$

$$\begin{array}{r} 13 \\ \times 76 \\ \hline \end{array}$$

$$\begin{array}{r} 49 \\ \times 67 \\ \hline \end{array}$$

$$\begin{array}{r} 23 \\ \times 39 \\ \hline \end{array}$$

$$\begin{array}{r} 72 \\ \times 55 \\ \hline \end{array}$$

$$\begin{array}{r} 17 \\ \times 84 \\ \hline \end{array}$$

$$\begin{array}{r} 93 \\ \times 12 \\ \hline \end{array}$$

$$\begin{array}{r} 20 \\ \times 56 \\ \hline \end{array}$$

$$\begin{array}{r} 39 \\ \times 38 \\ \hline \end{array}$$

$$\begin{array}{r} 61 \\ \times 81 \\ \hline \end{array}$$

$$\begin{array}{r} 42 \\ \times 64 \\ \hline \end{array}$$

$$\begin{array}{r} 79 \\ \times 83 \\ \hline \end{array}$$

$$\begin{array}{r} 71 \\ \times 83 \\ \hline \end{array}$$

$$\begin{array}{r} 86 \\ \times 48 \\ \hline \end{array}$$

$$\begin{array}{r} 61 \\ \times 24 \\ \hline \end{array}$$



Name : \_\_\_\_\_

Score : \_\_\_\_\_

Teacher : \_\_\_\_\_

Date : \_\_\_\_\_

$$\begin{array}{r} 40 \\ \times 38 \\ \hline 1520 \end{array}$$

$$\begin{array}{r} 72 \\ \times 69 \\ \hline 4968 \end{array}$$

$$\begin{array}{r} 92 \\ \times 37 \\ \hline 3404 \end{array}$$

$$\begin{array}{r} 52 \\ \times 13 \\ \hline 676 \end{array}$$

$$\begin{array}{r} 45 \\ \times 70 \\ \hline 3150 \end{array}$$

$$\begin{array}{r} 74 \\ \times 34 \\ \hline 2516 \end{array}$$

$$\begin{array}{r} 13 \\ \times 76 \\ \hline 988 \end{array}$$

$$\begin{array}{r} 49 \\ \times 67 \\ \hline 3283 \end{array}$$

$$\begin{array}{r} 23 \\ \times 39 \\ \hline 897 \end{array}$$

$$\begin{array}{r} 72 \\ \times 55 \\ \hline 3960 \end{array}$$

$$\begin{array}{r} 17 \\ \times 84 \\ \hline 1428 \end{array}$$

$$\begin{array}{r} 93 \\ \times 12 \\ \hline 1116 \end{array}$$

$$\begin{array}{r} 20 \\ \times 56 \\ \hline 1120 \end{array}$$

$$\begin{array}{r} 39 \\ \times 38 \\ \hline 1482 \end{array}$$

$$\begin{array}{r} 61 \\ \times 81 \\ \hline 4941 \end{array}$$

$$\begin{array}{r} 42 \\ \times 64 \\ \hline 2688 \end{array}$$

$$\begin{array}{r} 79 \\ \times 83 \\ \hline 6557 \end{array}$$

$$\begin{array}{r} 71 \\ \times 83 \\ \hline 5893 \end{array}$$

$$\begin{array}{r} 86 \\ \times 48 \\ \hline 4128 \end{array}$$

$$\begin{array}{r} 61 \\ \times 24 \\ \hline 1464 \end{array}$$

